



DELHI PUBLIC SCHOOL

SAIL Township, Ranchi

FIRST SEMESTER EXAMINATION (SESSION-2024-25)

SUBJECT: ENGLISH

DATE :- 10.09.2024

CLASS: – I **Sec:-** _____

Time: 2 Hours

M.O. :- _____

Roll no.:- _____

F. M. :- 40

NAME:- _____

I. Tick (✓) the correct option: (0.5x6= 3)

1. Which of the following is not a vowel?

- a) A ☐ b) B ☐ c) E ☐ d) U ☐

2. I drive your school bus. I am a

- a) tailor ☐ b) doctor ☐ c) driver ☐ d) baker ☐

3. I study in a

- a) zoo ☐ b) school ☐ c) park ☐ d) kitchen ☐

4. I sit on a

- a) chair ☐ b) eye ☐ c) pencil ☐ d) bag ☐

5. Based on your reading of the chapter ‘ The Lost Froggy’, answer the following:

i) Who said ,” Where have you been?”

- a) Froggy ☐ b) Froggy’s friend ☐ c) lawn ☐ d) pond ☐

ii) What sound was created when Froggy jumped into the pond?

- a) splash ☐ b) flash ☐ c) hash ☐ d) plash ☐

II. Select words from the box and write in suitable columns: (0.5x4=2)

mother, bull, aunt, king

HE	SHE

III. Underline the special names : (0.5x4=2)

1. The Ganga is a long river.

2. Preety can ride a bicycle.

3. My parrot, Mithu can talk.

4. The Red Fort is big.

IV. Circle the describing words:

(0.5x4= 2)

1. Her hair is long.
2. She loves her cute dog.
3. Rita has a blue balloon.
4. I saw an angry man.

V. Fill in the blanks with correct doing words from the help box :

(0.5x 4=2)

fly, lives, eats, play

1. The rabbit _____ in a burrow.
2. The donkey _____ grass.
3. Birds _____ in the sky.
4. The children _____ in the park.

VI. Write the PLURALS of the given words:

(0.5x 4= 2)

1. kite - _____
2. glass - _____
3. flower - _____
4. tomato - _____

VII. Make Sentences:

(1x4=4)

1. work - _____
- _____
2. room - _____
- _____
3. brother - _____
- _____
4. garden - _____
- _____

VIII. Write the rhyming words of the following:

(1x4=4)

1. tall - _____
2. play - _____
3. blow - _____
4. ten - _____

IX. Match the animals with their sounds :

(0.5x 4=2)

1. lion barks ☐
2. dog chirp ☐
3. birds roars ☐
4. cat mews ☐

X. Answer the following questions:

(2x4=8)

1. What did Koko and his family plan?
- _____
- _____
2. How do Mr. Rabbit and the child have fun?
- _____
- _____
3. What are the things you carry when you go for a picnic?
- _____
- _____
4. What did you learn from Jojo’s story?
- _____
- _____

XI. Write three lines on ‘ My house’

(3)

1. _____
2. _____
3. _____

XII. PICTURE COMPOSITION:



1) Tick the correct option: **(0.5x2=1)**

i) How many umbrellas can you count?

- a. 1 ☐ b. 2 ☐ c. 3 ☐ d. 4 ☐

ii) Which of the thing is not visible in the picture ?

- a. girl ☐ b. sun ☐ c. boy ☐ d. rain drops ☐

2) Answer the following in one word. **(1x2=2)**

i) Which season is shown in the picture? _____

ii) Name one thing that you use in the season shown in the picture. _____

XIII. UNSEEN PASSAGE :

Kind Tom

Tom went for a walk with his dog in the fog.
Tom saw a frog on a log. Log to log went the frog.

“Jump frog. Go! Frog” said Tom. The frog
jumped and jumped and went away far
from Tom and his dog.



Read the passage and answer the following questions.

1. Write two rhyming words of ‘frog’ from the passage. **(1x2=2)**

2. Tick the correct option: **(0.5x2=1)**

i) The doing word used in the passage:

- a. sleep ☐ b. cry ☐ c. jumped ☐ d. log ☐

ii) Log to log went the _____

- a. dog ☐ b. tom ☐ c. frog ☐ d. far ☐



DELHI PUBLIC SCHOOL

SAIL Township, Ranchi

FIRST SEMESTER EXAMINATION (SESSION-2024-25)

SUBJECT: EVS

DATE :- .09.2024

CLASS: – I **Sec:-** _____

Time: 2 Hours

M.O. :- _____

Roll no.:- _____

F. M. :- 40

NAME:- _____

I. Tick (✓) the correct answer: (0.5×5=2.5)

1. Cub is the baby of a _____.

(a) horse ☐

(b) cat ☐

(c) tiger ☐

2. Which is the home of a rabbit?

(a) den ☐

(b) burrow ☐

(c) hive ☐

3. We find seeds inside _____.

(a) fruits ☐

(b) branches ☐

(c) flowers ☐

4. We eat the _____ of broccoli plant.

(a) fruits ☐

(b) leaves ☐

(c) flowers ☐

5. Ravi says that it is very tasty. Which sense organ helps him to know that it is tasty?

(a) skin ☐

(b) eyes ☐

(c) tongue ☐

II. Write (T) for true and (F) for false for the statements given below:

(0.5×5=2.5)

1. An ant has four legs.

☐

2. An apple has only one seed inside it.

☐

3. Laddus are sweet in taste.

☐

4. We must bite our nails everyday.

☐

5. A table is a living thing.

☐

III. Fill in the blanks by using the help box:

(0.5×5=2.5)

Buds,	roots,	air,	caves,	dirty
-------	--------	------	--------	-------

1. We breathe in _____ all the time.
2. Bears live in _____.
3. We eat the _____ of carrot plant.
4. _____ open to form flowers.
5. Drinking _____ water can make us sick.

IV. Match the following:

(0.5×5=2.5)

- | | | |
|-----------------|---------------------------|----------------------|
| 1. Yoga Day | (a) sugarcane plant | <input type="text"/> |
| 2. sugar | (b) farm animal | <input type="text"/> |
| 3. horses | (c) forest | <input type="text"/> |
| 4. wild animals | (d) nuts | <input type="text"/> |
| 5. squirrels | (e) 21 st June | <input type="text"/> |

V. Give one word answer for the following:

(1×5=5)

1. What does an elephant eat? _____.
2. Give an example of food with a sour taste. _____.
3. Name a home that we build for our **pet** animals. _____.

4. Write one example of a small animal. _____.

5. Name one thing we make using wheat. _____.

VI. Fill in the blanks:

(1×5=5)

1. Fir trees grow on _____.

2. We can eat some _____ without cooking.

3. Monkeys and squirrels live on _____.

4. _____ (pet animal) can smell better than us.

5. We keep fish in an _____ inside our home.

VII. Define:

(1.5×2=3)

1. exercise - _____

2. cereals- _____

VIII. Name two:

(0.5×4=2)

1. Creepers : _____ , _____.

2. Stems that we eat: _____ , _____.

IX. Answer the following questions:

1. How can we keep ourselves clean? **(1.5)**

2. How do sense organs help us? **(1.5)**

3. What are insects? Write one example. **(2)**

4. Why should we take care of trees? **(1.5)**

5. Why should we wash fruits and vegetables before eating? **(1.5)**

X. Draw, colour and name one non-living thing.

(2)

This image shows a completely blank white rectangular area enclosed within a thin black border. There are no markings, text, or illustrations present on the page.

XI. Do as directed:

(0.5×5=2.5)

1. Look at the picture and tick (✓) the living things.



2. Tick (✓) the correct organs used for doing the following things.

(i) clap:



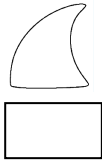
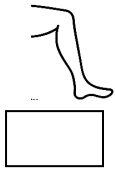
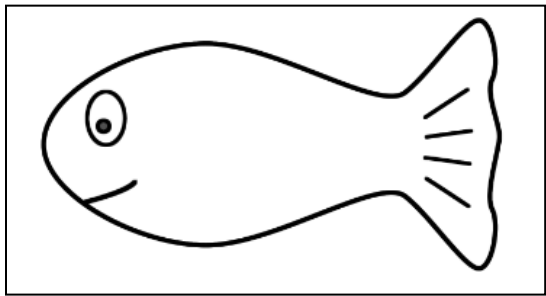
11

(ii) bite :

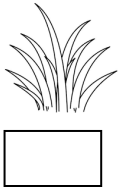



10

3. Look at the picture and tick (✓) the missing body part.



4. Look at the picture and tick (✓) a herb:



XII. Circle the odd one out :

(0.5×5=2.5)

1.

pea

rajma

mustard

gram
2.

cow

pencil

sparrow

neem tree
3.

sour

green

bitter

sweet
4.

stable

shed

apple

coop

5.





DELHI PUBLIC SCHOOL

SAIL Township, Ranchi

FIRST SEMESTER EXAMINATION (SESSION-2024-25)

SUBJECT: Hindi

DATE :- .09.2024

CLASS: – I Sec:- _____

Time: 2 Hours

M.O. :- _____

Roll no.:- _____

F. M. :- 40

NAME:- _____

I. सही उत्तर चुनकर (✓) लगाएँ :

[0.5 x 6 = 3]

1. रिमझिम—रिमझिम क्या आ गई ?

(क) बारिश ☐

(ख) चिड़िया ☐

(ग) हवा ☐

2. नैना की नानी किससे आई ?

(क) बस ☐

(ख) रेल ☐

(ग) हाथी ☐

3. पापा की मम्मी को क्या कहते हैं ?

(क) चाची ☐

(ख) नानी ☐

(ग) दादी ☐

4. सही शब्द पर (✓) का निशान लगाएँ।

(i) (क) विधी ☐

(ख) विधि ☐

(ग) वीधी ☐

(ii) (क) पुरब ☐

(ख) पूरब ☐

(ग) पारुव ☐

(iii) (क) गड़बड़ि ☐

(ख) गड़ीबड़ी ☐

(ग) गड़बड़ी ☐

II. चित्र देखकर सही मात्रा लगाइए :

[0.5 x 2 = 1]

(क) मछ..... (लि/ली)



(ख)तली (ति/ती)



III. चित्र देखकर शब्दों में बिंदु (ॐ) या चंद्रबिंदु (ॐ) लगाएँ :

[0.5 x 3 = 1.5]

(क)  ऊट

(ख)  अडा

(ग)  बदर

IV. सही मिलान करें :

[0.5 x 3 = 1.5]

- | | | |
|---------|-------|--------------------------|
| 1. सखी | झोला | <input type="checkbox"/> |
| 2. मेल | मिलाप | <input type="checkbox"/> |
| 3. थैला | सहेली | <input type="checkbox"/> |

V. स्वर का मिलान उसकी मात्रा से करें :

[0.5 x 4 = 2]

- | | | |
|------|---|--------------------------|
| 1. इ | इ | <input type="checkbox"/> |
| 2. ऐ | ऐ | <input type="checkbox"/> |
| 3. ए | ए | <input type="checkbox"/> |
| 4. ई | ई | <input type="checkbox"/> |

VI. चित्र को देखकर दिए गए शब्दों से खाली स्थान भरें :

[0.5 x 4 = 2]



बादल , आम , बेंच , पक्षी , मोर , केला

1. आकाश में तीन उड़ रहे हैं।
2. चित्र में का एक पेड़ है।
3. पेड़ के पास एक रखी है।
4. सूरज के पीछे छिप गया है।

VII. वाक्य बनाएँ :

[1x5 = 5]

1. नदी —.....
2. खुश —.....
3. रेल —.....
4. पायल —.....
5. बच्चे —.....

VIII. दिए गए गद्यांश को पढ़कर प्रश्नों के उत्तर दें :

एक बार एक छोटी-सी तितली बाग में इधर-उधर उड़ रही थी। तितली के पंख बहुत कोमल और रंग-बिरंगे थे। उसके छह पैर थे। तितली फूलों का रस पी रही थी। वह हम बच्चों को बहुत अच्छी लगी। तितली बाग की रानी कहलाती है।

(i) खाली स्थान में गद्यांश से सही शब्द चुनकर लिखें : **[0.5x 4 = 2]**

- 1. तितली के पैर थे।
- 2. बाग की रानी कहलाती है।
- 3. तितली के पंख और थे।

(ii) प्रश्न का उत्तर पूरे वाक्य में लिखें : **[1x 1 = 1]**

- 1. तितली कहाँ उड़ रही थी?
.....
.....

IX. एक नाम लिखें :- **[1x 3 = 3]**

- 1. नदी का नाम –
- 2. पहाड़ का नाम –
- 3. दिन का नाम –

X. प्रश्नों के उत्तर पूरे वाक्य में लिखें : **[1.5 x 4 = 6]**

- 1. मम्मी की मम्मी को आप क्या कहते हैं ?
उत्तर—.....
.....
- 2. आलू किसने उगाए ?
उत्तर—.....
.....
- 3. आपके शहर का क्या नाम है ?
उत्तर—.....
.....
- 4. नैना की सखी का क्या नाम है ?
उत्तर—.....
.....

XI. एक से अनेक बनाकर लिखें :

[1x 3 = 3]

1. बकरी –
2. माला –
3. आँख –

XII. 'तोता' अथवा 'मेरे दादाजी' विषय पर पाँच वाक्य लिखें :


[1 x 5 = 5]


- 1.....
-
- 2.....
-
- 3.....
-
- 4.....
-
- 5.....
-

XIII. दिए गए शब्दों में से स्त्री-पुरुष छाँटकर लिखें :-

[0.5x4=2]

शेर , बहन , नाना , मोरनी

स्त्री	
1.	
2.	

पुरुष	
1.	
2.	

XIV. स्वर और व्यंजन अलग करके लिखें :-

[0.5x4=2]

शब्द	स्वर	व्यंजन
और		
ऊन		



DELHI PUBLIC SCHOOL

SAIL Township, Ranchi

FIRST SEMESTER EXAMINATION (SESSION-2024-25)

SUBJECT: Maths

DATE :- 12.09.2024

CLASS: – I Sec:- _____

Time: 2 Hours

M.O. :- _____

Roll no.:- _____

F. M. :- 40

NAME:- _____

I. Choose the correct option :

(0.5x10=5)

Q1. Count the number of flowers and tick (✓) the correct number :



(a) 6 ☐

(b) 3 ☐

(c) 5 ☐

Q2. Tick (✓) the greatest number :

(a) 5 ☐

(b) 7 ☐

(c) 2 ☐

Q3. **Subtract** and tick (✓) the correct option :



(a) 3 ☐

(b) 5 ☐

(c) 4 ☐

Q4. **Add** and tick (✓) the correct option :



(a) 5 ☐

(b) 9 ☐

(c) 6 ☐

Q5. Which of the following sets of numbers are arranged in ascending order ?

(a) 12 , 4 , 19 , 1 ☐

(b) 1 , 4 , 12 , 19 ☐

(c) 19 , 12 , 4 , 1 ☐

Q6. There are 4 people in my family. My mom has arranged the table for 10 people for the dinner. How many guests are coming for the dinner ?

(a) 3 ☐

(b) 5 ☐

(c) 6 ☐

Q7. Which of the following number sentence **does not** give the answer as 8 ?

(a) $6 + 2$ ☐

(b) $9 - 1$ ☐

(c) $5 + 4$ ☐

Q8. Which of the following number is greater than 1 ten 6 ones ?

(a) 16 ☐

(b) 12 ☐

(c) 18 ☐

Q9. Tick (✓) the number more than 10.

(a) 6 ☐

(b) 25 ☐

(c) 9 ☐

Q10. Tick (✓) the correct option :

8 tens ☐ 5 tens 4 ones

(a) $>$ ☐

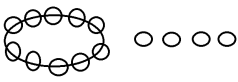
(b) $<$ ☐

(c) $=$ ☐

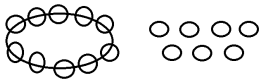
II. See the pictures and write the number names :

(1x5=5)

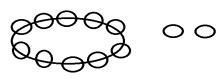
- a)



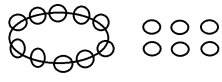
1 ten 4 ones
- b)




1 ten 7 ones
- c)



1 ten 2 ones
- d)



1 ten 6 ones
- e)



1 ten

III.Fill in the blanks :

(0.5x10=5)

- a) 89 = 80 +
- b) The number ‘forty seven’ in numeral is
- c) 7 tens 2 ones in expanded form is
- d) C is the

letter in the word ‘S U B T R A C T I O N’ .

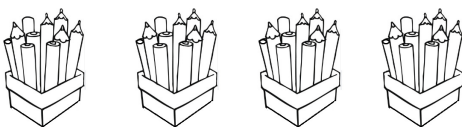
(Write ordinal number)
- e) I am a number just before 8 – 6 . Who am I ?
- f) The roman numeral for 9 is
- g) 3 tens + 5 tens =
- h) 98 – = 40
- i) When we subtract 0 from a number, we get the
- j) Fill in the missing number :

eleven ,


, thirteen .

IV.Look at the picture and fill in the blanks :

(0.5x2+1=2)

 tens

and

 ones

=

V. Complete the table : (0.5x4=2)

a) $4 \times 7 =$ _____

b) $5 \times 9 =$ _____

c) $3 \times 8 =$ _____

d) $2 \times 6 =$ _____

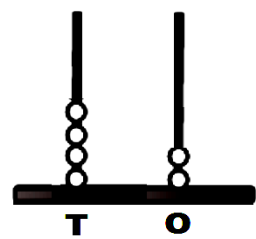
VI. Read the table of attendance for Class I and write the correct answers: (0.5x5=2.5)

MONDAY	TUESDAY	WEDNESDAY	THURSDAY	FRIDAY
20	35	26	32	28

1. On which day was the least number of students present ? _____
2. Add the number of students present on Monday and Thursday. _____
3. Which day comes after Tuesday ? _____
4. Subtract the number of students present on Wednesday from that of Friday.

5. On which day most of the students were present ? _____

VII. Write the number shown on the abacus in the following ways :

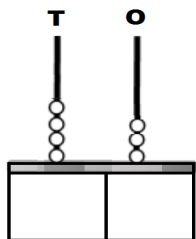


- a) Standard Form – _____ (0.5)
- b) Expanded Form – + (0.5x2=1)
- c) Tens and Ones – _____ Tens _____ Ones (0.5x2=1)
- d) Word Form – _____ (1)

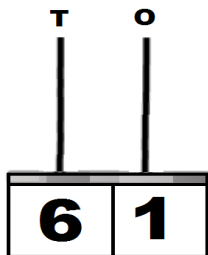
VIII. Write the number names : (1x4=4)

- a) 240 – _____
- b) 292 – _____
- c) 115 – _____
- d) 300 – _____

IX. (1) Write the number formed by the abacus given below : (0.5x2=1)



(2) Make the beads in each spike of abacus : (0.5x2=1)



X. Addition : (1.5x2=3)

a) T O
 □
 6 8
+ 2 4
 □ □

b) T O
 □
 7 4
+ 6
 □ □

XI. Subtract : (1x2=2)

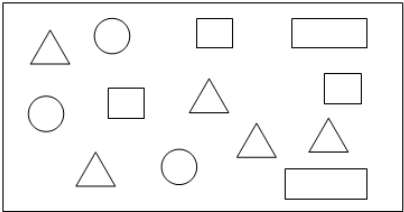
a) T O
 3 9
- 8
 □ □

b) 15 - 6 = □

XII. Solve these word problems :

1. Amar had 19 bells. He gave 6 bells to his sister. How many bells are left with him? (2)

2. Class 1 has a collection of shapes. Count and answer the following: (0.5+1+0.5=2)



- (a) Number of Triangle = _____ .
(b) Number of ○ + Number of □ = _____ .
(c) Number of Rectangle - Zero = _____ .



DELHI PUBLIC SCHOOL

SAIL Township, Ranchi

FIRST SEMESTER EXAMINATION (SESSION-2024-25)

SUBJECT: General Knowledge

DATE :- 02.09.2024

CLASS: – I **Sec:-** _____

Time: 1 Hour

M.O. :- _____

Roll no.:- _____

F. M. :- 25

NAME:- _____

I . Tick (✓) the correct option:- (0.5x6=3)

1. House is a ___ thing .

a) natural ☐

b) man-made ☐

c) hat ☐

2. Pig lives in a__.

a) shed ☐

b) stable ☐

c) sty ☐

3. Parrots can copy __.

a) sounds ☐

b) book ☐

c) apple ☐

4. I brush my ___everyday.

a) tongue ☐

b) teeth ☐

c) leg ☐

5. The sound of a fox is __.

a) chirp ☐

b) howl ☐

c) quack ☐

6. The opposite of 'old' is

a) sad ☐

b) young ☐

c) wet ☐

II. Fill in the blanks using the help box given:- (0.5x5=2.5)

plumber, Neck, sunflowers, Draupadi Murmu, hockey

1. _____ joins the head to your body.

2. Young _____ follow the Sun from east to west.

3. The current President of India is _____.

4. The national game of India is _____.

5. A _____ repairs water pipes and fittings.

III. Name two: (1x6=6)

a) Means of transport : 1. _____ 2. _____

b) Tools we use everyday: 1. _____ 2. _____

c) Natural things: 1. _____ 2. _____

IV. Who am I?(1x4=4)

1. I grow crops for you. I am a_____.
2. I am your uncle's daughter. I am your _____.
3. I give you wool. I am a _____.
4. I am a place of worship. Christians go here._____.

V. Answer in ONE or TWO WORDS only:-(1x5=5)

1. What is the yellow part of an egg called?

2. Where do we keep our money?

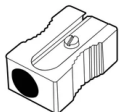
3. What does cow give us?

4. What is the sound of a snake?




5. The call of which animal is loudest on the Earth?




VI. Identify the name of pictures given using the help box.(0.5x5=2.5)

stethoscope, soldier, aeroplane, hospital, sharpener



VII. Circle the odd one out:(0.5x4=2)

1.			
2.	rose	tulip	pan

3.			
4.	carrot	radish	grapes



DELHI PUBLIC SCHOOL

SAIL Township, Ranchi

FIRST SEMESTER EXAMINATION (SESSION-2024-25)

SUBJECT: Computer

DATE :- 04.09.2024

CLASS: – I Sec:- _____

Time: 1 Hour

M.O. :- _____

Roll no.:- _____

F. M. :- 20

NAME:- _____

Q1) Choose the correct option: -

[0.5 x 4 = 2]

a) I am used to record voice.

i) CPU ☐

ii) Monitor ☐

iii) Microphone ☐

b) Don't press the keys of the keyboard _____.

i) Gently ☐

ii) Hardly ☐

iii) Softly ☐

c) I can help you to display words and numbers.

i) Printer ☐

ii) Monitor ☐

iii) Speaker ☐

d) I am known as the Brain of the computer.

i) CPU ☐

ii) Printer ☐

iii) Calculator ☐

Q2) Fill in the blanks:-

[1 x 4 = 4]

human beings

accurate

eatables

wires

a) Never keep _____ near the computer.

b) Computer gives _____ results.

c) Don't play with _____ of the computer.

d) Robot is a machine created by _____ .

Q3) Unscramble the words:-

[1 x 4 = 4]

a) BAORDYEK - _____

b) RIOMNTO - _____

c) PUEROCMT - _____

d) CHWISTSE - _____

P.T.O.

Q4) Write T for True and F for False: -

[0.5 x 4 = 2]

- a) AI devices make our life easier.

[]
- b) A computer can't show movies and cartoons.

[]
- c) Sonu takes off his shoes before entering the computer lab.

[]
- d) AI means actual intelligence.

[]

Q5) Match the following: -

[0.5 x 4 = 2]

- a) Robots

i) Used to Draw Pictures.

[]
- b) Roomba

ii) Act like humans.

[]
- c) Smart Watch

iii) Clean floor.

[]
- d) Mouse

iv) Count steps of walking.

[]

Q6) Answer the following questions: -

[2 x 2 = 4]

a) Write one difference between Natural things and Man-made machines.

Natural Things	Man-made Machines

b) List any two activities that you can perform on a computer.

Q7) Colour the AI based device with blue and Natural object with green:-

[2]

